




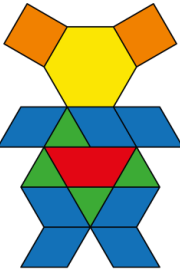


3 Levels






Count the shapes you used.

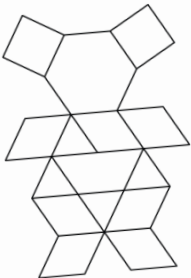
	=	_____		=	_____
	=	_____		=	_____
	=	_____			



bear






Count the shapes you used.


	=	_____		=	_____
	=	_____		=	_____
	=	_____			



bear





Count the shapes you used.


	=	_____		=	_____
	=	_____		=	_____
	=	_____			



bear


















Count the shapes you used.

	=	1		=	5
	=	6		=	3






bird

Build It And Solve It!
 Name: _____
 Directions: Build the bird. Fill in the numbers in the equations and solve.

	+	_____	=	6
	+		=	11
	+		=	_____
	+		=	_____
	=	_____		
	-	_____	=	_____
	-		=	_____
	-		=	_____
	-		=	_____
	-		=	_____


Build It And Solve It!
 Name: _____
 Directions: Build the deer. Fill in the numbers in the equations and solve.

	+	_____	=	_____
	+		=	_____
	+		=	_____
	+		=	_____
	+		=	_____
	+		=	_____
	+		=	_____
	+		=	_____
	+		=	_____
	+		=	_____
	+		=	_____
	+		=	_____
	+		=	_____
	+		=	_____
	+		=	_____
	+		=	_____
	+		=	_____
	+		=	_____
	+		=	_____
	+		=	_____
	+		=	_____
	+		=	_____
	+		=	_____
	+		=	_____
	+		=	_____
	+		=	_____
	+		=	_____
	+		=	_____
	+		=	_____
	+		=	_____
	+		=	_____
	+		=	_____
	+		=	_____
	+		=	_____
	+		=	_____



Build It With Shapes

Build the picture with pattern blocks. Trace the word. Count the shapes and write the number in the blank.

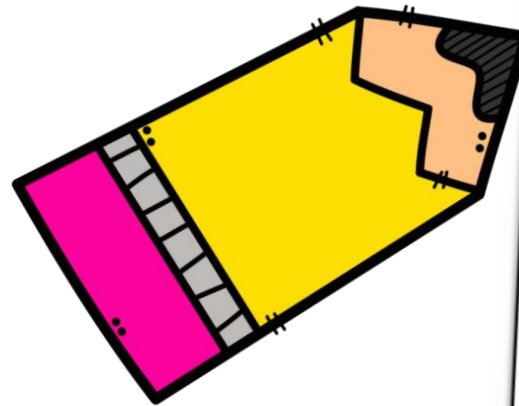


Build It And Solve It!

bear Name: **Elizabeth**

Directions: Build the bear. Fill in the numbers in the equations and solve.

$4 + 0 = 4$	$\triangle + \square = \underline{\quad}$
$\square + \triangle = \underline{\quad}$	$\triangle + \square = \underline{\quad}$
$\square + \square = \underline{\quad}$	$\square + \square = \underline{\quad}$
$\square + \square = \underline{\quad}$	$\square + \triangle = \underline{\quad}$
$\square - \square = \underline{\quad}$	$\triangle - \square = \underline{\quad}$
$\triangle - \square = \underline{\quad}$	$\triangle - \square = \underline{\quad}$
$\triangle - \square = \underline{\quad}$	$\square - \triangle = \underline{\quad}$



Solve The Equations

Plug in the numbers to the equations and solve.