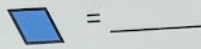


FALL

Build it with shapes and solve



Count the shapes you used.



= _____



= _____



= _____




= _____

owl



FALL

Build it with shapes and solve




FALL

Build it with shapes and solve


Build It With Shapes

Build the picture with pattern blocks. Trace the word. Count the shapes and write the number in the blank.



Solve The Equations

Plug in the numbers to the equations and solve.



Build It And Solve It!

oak leaf Name: _____

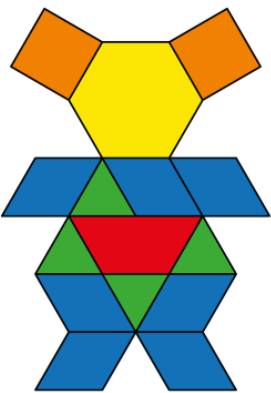
Directions: Build the oak leaf. Fill in the numbers in the equations and solve.

$3 + 2 = 5$






$\triangle + \triangle = \underline{\quad}$	$\triangle + \text{hexagon} = \underline{\quad}$
$\triangle + \text{hexagon} = \underline{\quad}$	$\text{diamond} + \text{trapezoid} = \underline{\quad}$
$\triangle + \text{trapezoid} = \underline{\quad}$	$\text{hexagon} + \triangle = \underline{\quad}$
$\text{trapezoid} + \text{diamond} = \underline{\quad}$	$\text{trapezoid} + \text{hexagon} = \underline{\quad}$
$\triangle - \text{hexagon} = \underline{\quad}$	$\text{trapezoid} - \text{hexagon} = \underline{\quad}$

FALL

Build it with shapes and solve



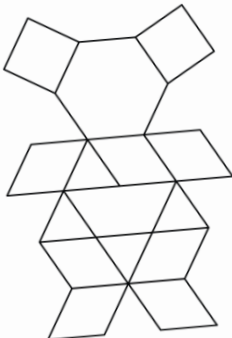
Count the shapes you used.

	=	___		=	___
	=	___		=	___
				=	___






bear

3 Levels

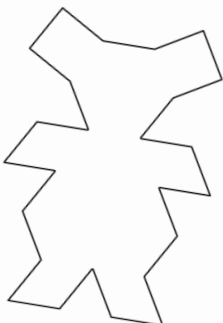
Differentiate for your students with 3 different puzzle levels.








Count the shapes you used.

	=	___		=	___
	=	___		=	___
				=	___

bear



Count the shapes you used.

	=	___		=	___
	=	___		=	___
				=	___

bear