


INDEPENDENCE DAY

Build it with shapes and solve

Count the shapes you used.



Statue of Liberty

INDEPENDENCE DAY

Build it with shapes and solve

Count the shapes you used.



= _____



= _____




= _____



= _____



= _____




eagle

INDEPENDENCE DAY

Build it with shapes and solve


Build It With Shapes

Build the picture with pattern blocks. Trace the word. Count the shapes and write the number in the blank.



Solve The Equations

Plug in the numbers to the equations and solve.



Build It And Solve It!

Name: _____

Directions: Build the Statue of Liberty. Fill in the numbers in the equations and solve.

$3 + 2 = 5$ $\triangle + \square = \underline{\quad}$

$\square + \triangle = \underline{\quad}$ $\triangle + \square = \underline{\quad}$

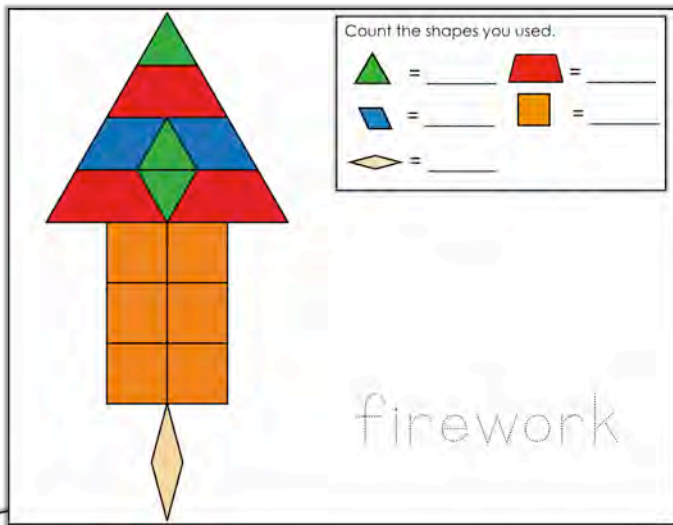
$\square + \square = \underline{\quad}$ $\square + \square = \underline{\quad}$

$\square + \square = \underline{\quad}$ $\square + \triangle = \underline{\quad}$

$\square - \square = \underline{\quad}$ $\triangle - \square = \underline{\quad}$

INDEPENDENCE DAY

Build it with shapes and solve



3 Levels

Differentiate for your students with 3 different puzzle levels.

