



MATH ACTIVITIES

SCHOOL BUDS ADDITION 


Name: _____

Directions: Fill in the missing number. Solve.


A. $4 + 6 = 10$	B. $4 + 2 = 6$
C. $5 + 1 = 6$	D. $3 + 3 = 6$
E. $5 + 4 = 9$	F. $1 + 6 = 7$
G. $1 + 2 =$	H. $0 + 1 =$
I. $1 + 3 =$	J. $7 + 1 =$
K. $1 + 1 =$	L. $1 + 0 =$

A. 


School buds addition


B. 


School buds addition

C. 

School buds addition

J. 

E. 

D. 

School buds addition


MATH ACTIVITIES

Includes Low Prep,
Printable Math Activities
for:

- Fractions
- Place Value
- Addition
- Subtraction
- Counting On



MATH ACTIVITIES



25
What comes next..by 1's

SCHOOL BUDS
WHAT COMES NEXT?

Name: _____

Directions: Fill in the missing number.
Count on by 1's.

A. <u>25</u> <u>26</u> , <u>27</u> , <u>28</u>	B. <u>12</u> <u>13</u> , <u>14</u> , <u>15</u>
C. <u>6</u> <u>7</u> , <u>8</u> , <u>9</u>	D. <u>20</u> <u>21</u> , <u>22</u> , <u>2</u>
E. <u>15</u> <u>16</u> , <u>17</u> , <u>18</u>	F. <u>7</u> <u>8</u> , <u>9</u> , <u>10</u>
G. _____	H. _____
I. _____	J. _____
K. _____	L. _____
M. _____	N. _____
O. _____	P. _____

20
What comes next..by 1's

12
What comes next..by 1's

6
What comes next..by 1's

15
What comes next..by 1's


5
What comes next..by 1's

7
What comes next..by 1's

MATH ACTIVITIES

Name: _____

SCHOOL BUDS SUBTRACTION



Directions: Fill in the missing number. Solve.

A.

$$7 - 7 = 0$$

B.

$$2 - 1 = 1$$

C.

$$6 - 0 = 6$$

D.

$$9 - 1 = 8$$

E.

$$10 - 3 = 7$$

F.

$$2 - 2 = 0$$

G.

$$\text{[Trash can icon]} - 1 = \underline{\quad}$$

H.

$$6 - \text{[Glue stick icon]} = \underline{\quad}$$

J.

$$8 - \text{[Scissors icon]} = \underline{\quad}$$


L.

$$\text{[Book icon]} - 1 = \underline{\quad}$$


E.



F.



G.



H.



K.

